

MADINAH ISLAMIC JUNIOR SCH, NSANCGI
RECESS WORK TERM I 2020
PRIMARY FIVE SCIENCE

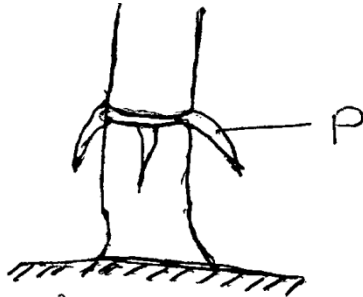
Name: _____

1. Identify one crop which can be grown in swampy area
.....
2. Explain the term food path
.....
3. Name one way of preserving fish for future food
.....
4. Give any one type of soil erosion
.....
5. What is a balanced diet?
.....
6. Name the hardest part of tooth in a man
.....
7. Why do bees visit flowers in a farmers garden
.....
8. Name one domestic animal known for security at home
.....
9. Explain the word food crop
.....
10. Give one condition necessary for seed germination
.....
11. Apart from drinking, identify any other one use of water to people
.....
12. How many teeth do a grown up person above 18years of age have?
.....
13. Give one way food can be contaminated.
.....
14. Why is it dangerous to drink un boiled water?
.....
15. Why are most flowers brightly coloured?
.....
16. Define the term poultry vices
.....
17. Identify any one type of honey bee
.....
18. What is the normal body temperature of a human being?
.....
19. How does heat travel through solid
.....
20. Name one breed of rabbit.
.....

21. What are parasites?

22. How is a queen excluder as a component of a modern bee important?

23. Study the diagram below and answer questions 24



24. Give the main function of part **p** to the plants

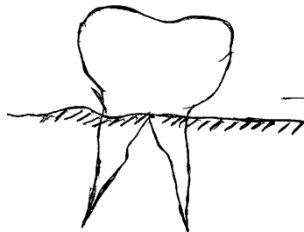
25. Identify any one plants material used for mulching our garden

26. Define agro forestry

27. Name any one example of endo parasites in poultry

28. Which type of bee is responsible for fertilizing the queen

29. Identify the type of tooth drawn below



30. What special name is given to house of rabbits

31. Write down any one six killer disease in an area

32. Why do some plants climb others?

33. Give one reason why some poultry birds eat their eggs after laying?

34. Identify one reason why earth worms comes out after serious raining?

35. Name the gas responsible for preserving drinks like soda

36. Why do most poultry farmers prefer keeping birds under free range system in rural areas?

37. Give a reason why some eggs may fail to hatch under favourable condition

38. Mention one element of primary health care

39. Name one disease of digestive system

40. What name is given to a female part of a flower

41. Identify any one crop you know

42. Why are gaps left between railway lines after construction

43. Differentiate between thinning pruning in crop growing.

SECTION B

44. Give any two sources of water in an area

i.

ii.

b) What are the two uses of water to people

i.

ii.

c) Which cloud gives us rain?

45. Name three types of soil erosion

i.

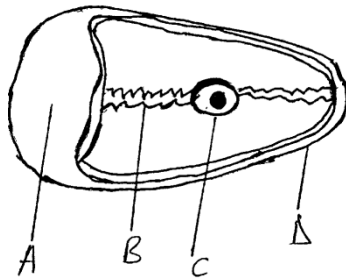
iii.

ii.

b) Give one use of crop rotation to people

c) Differentiate between weeds and weeding.

46. Study the diagram below carefully and answer questions that follow



a) Name parts marked

i. A.....

ii. B.....

iii. C.....

b) What is the function of part marked D

c) How many days do a broody hen takes to incubate.

47. What is matter?

b) Give any two examples of solid material

i.

ii.

c) Why do some object float on top of water?

48. Define the term soil profile?

b) Identify the type of soil good for pottery

c) Which type of soil is good for making glasses?

d) Name the type of soil which is good for agriculture

49. Give the function of the following teeth

i. Incisor.....

ii. Canines.....

iii. Premolar.....

iv. Molar.....

50. How do bees protect themselves?

b) Which type of bee feed larvae?

c) What is the best time for harvesting honey

d) Explain the term swarming of bees.

51. Define fracture?

b) Name any two types of fracture you know

i.

ii.

c) Give two importance of giving first aid to a person

i)

ii)

52. What do you understand by the term poultry vices?

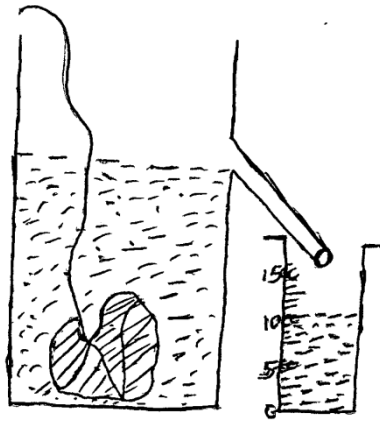
b) Name any two poultry vices common among poultry birds

i)

ii)

c) Why do some layers eat their eggs after laying

53. Study the diagram below and answer questions that follow



a) What name is given to the above method

.....

b) What is the volume of the object?

.....

c) How is the string useful in the above diagram?

.....

54. What term is used to mean the body's ability to resist germs?

.....

b) State three ways in which a child can acquire natural immunity

i.

ii.

iii.

c) Give any one method of immunization

.....

55. Identify any one reason why people rear rabbits

.....

b) What name is given to a young one of a rabbit?

.....

c) Identify any two diseases which affects rabbits

i.

ii.